









To know how to count objects from a larger group

1 Circle the correct amount from the group.

Circle 4	
Circle 2	
Circle 5	
Circle 3	

2 Colour 4 beads from each set. How many are left?

	Colour 4 beads	How many are left?
Set 2		
Set 3		
Set 3		
Set 4		

3 Classroom Hunt.

You will need:

- Number cards 1-10
- Cards with classroom objects.

Pick a number card and a classroom object card.

Can you count and collect that number of objects?

To know how to count objects from a larger group

Question Number	Question	Answer
1	Circle the correct amount from the group.	a) 4 circled b) 2 circled c) 5 circled d) 3 circled
2	Colour 4 beads from each set. How many are left?	Set 1: 2 Set 2: 3 Set 3: 5 Set 4: 6
3	Classroom hunt	Various answers depending on objects and numbers picked.