
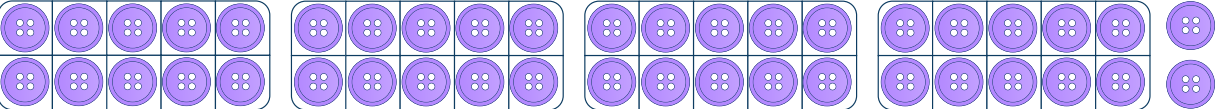




To understand how to count objects by grouping into ten


- 1 Practical activity:
 Get a handful of objects.
 Make groups of 10.
 Count how many objects you have.

Do this 3 times.

- 2 How many of each item are there?

a 
 b 
 c 
 d 

- 3 Match the representation and the number.



24

40

42

14

To understand how to count objects by grouping into ten

Question Number	Question	Answer
1	Practical activity.	Answers will vary.
2	How many of each item are there?	a) 24 b) 42 c) 21 d) 12
3	Match the representation and the number.	24 with number shapes 42 with Base 10 14 with sticks 40 with eggs