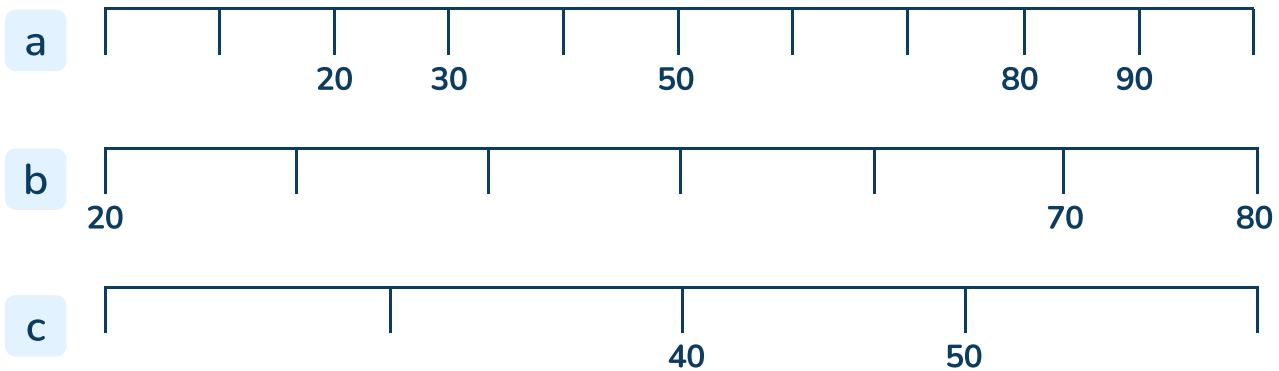
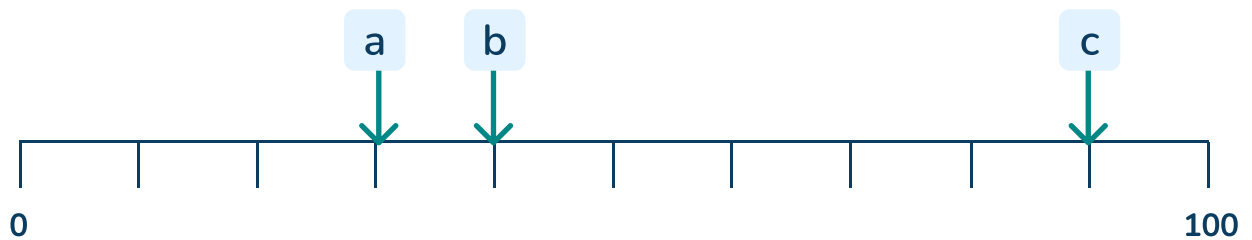


To know how to use a number line to 100 (1)

1 Complete these number lines.



2 Which number is each arrow pointing to?



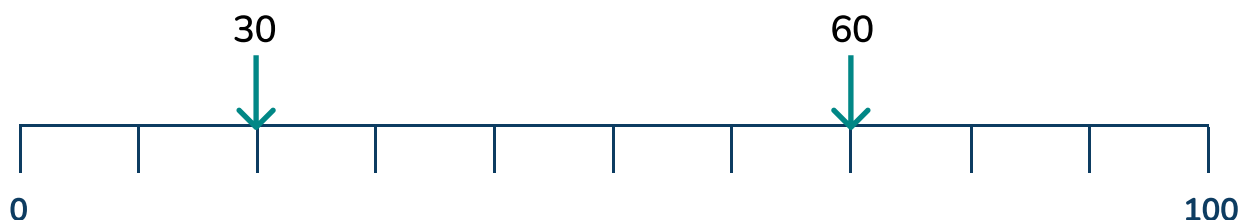
3 Draw an arrow to show these numbers on the number line.

a 80

b 40



c Do the arrows and numbers match?



To know how to use a number line to 100 (1)

Question Number	Question	Answer
1	Complete these number lines.	a) 0, 10, 40, 60, 70, 100 b) 30, 40, 50, 60 c) 20, 30, 60
2	Which number is each arrow pointing to?	a) 30 b) 40 c) 90
3	Do the arrows and numbers match?	a and b) Arrows should accurately show 80 and 40. c) Incorrect, this shows 20 d) Incorrect, this shows 70