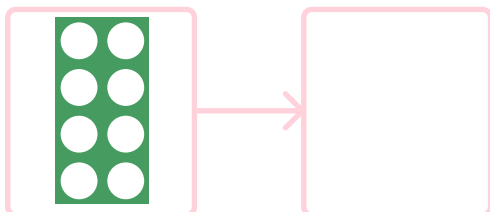


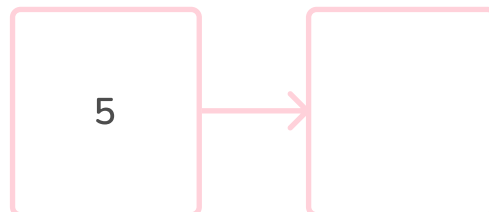
To know how to count 1 less

1 Find 1 less.

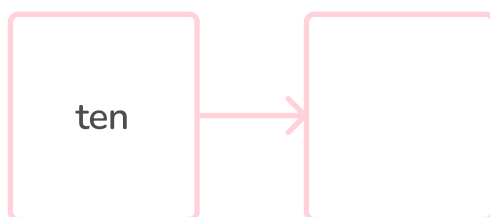
a



b

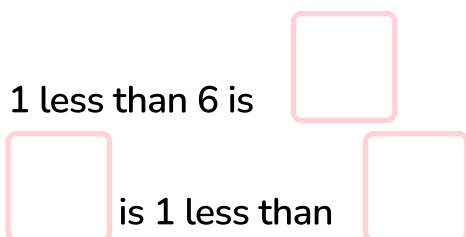


c

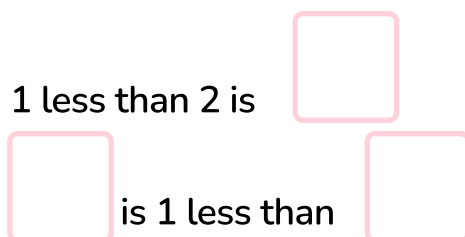


2

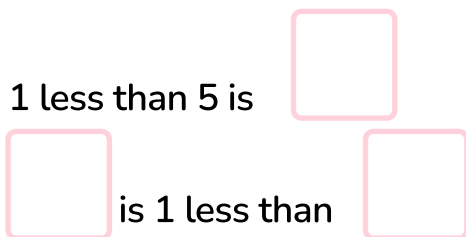
a



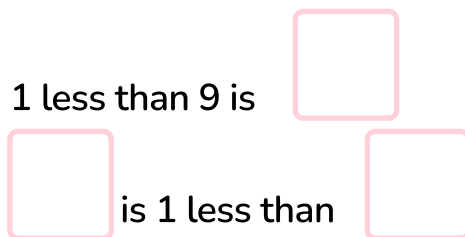
b



c



d



3 Practical activity:

You will need:

- A tens frame
- A dice (or number cards)

Roll the dice (or pick a number card).

Colour the number shown on your tens frame and circle 1 less than the number.

To know how to count 1 less

Question Number	Question	Answer
1	Find 1 less	a) Number shape showing 7 or 7 b) 4 c) nine
2	1 less than x is y. y is 1 less than x.	a) 5, 5, 6 b) 1, 1, 2 c) 4, 4, 5 d) 8, 8, 9
3	Practical activity.	Answers will vary depending on the choice of number.